


LOTTIE'S COUNT THE SPOTS




Name: _____

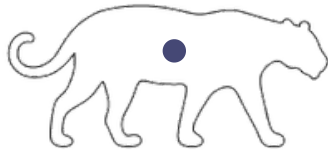
**DRAW A LINE TO CONNECT THE LEOPARD TO
THE CORRECT NUMBER OF SPOTS**




1




2




3



4



5




6




7



8



9



10

LOTTIE'S COUNT THE SPOTS



Answers

DRAW A LINE TO CONNECT THE LEOPARD TO THE CORRECT NUMBER OF SPOTS

The image shows 10 leopards in a vertical column, each with a different number of spots. To the right of the leopards are numbers 1 through 10. Lines connect each leopard to its corresponding number. The connections are as follows:

- Leopard 1 (10 spots) connects to 10.
- Leopard 2 (8 spots) connects to 8.
- Leopard 3 (6 spots) connects to 6.
- Leopard 4 (4 spots) connects to 4.
- Leopard 5 (2 spots) connects to 2.
- Leopard 6 (1 spot) connects to 1.
- Leopard 7 (8 spots) connects to 8.
- Leopard 8 (6 spots) connects to 6.
- Leopard 9 (4 spots) connects to 4.
- Leopard 10 (2 spots) connects to 2.